

**Exercise 3**  
**Keynesian Cross and the Multiplier**

1. The Keynesian consumption function assumes that  $0 < MPC < 1$ ; what is the basis for such assumption?

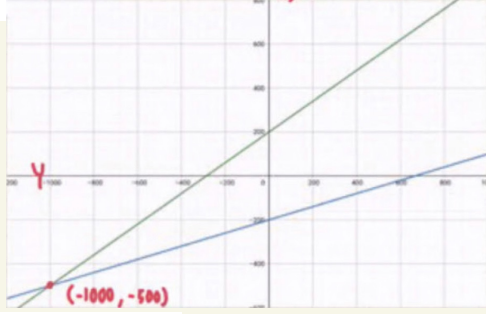
Consumption function  $\rightarrow C = C_0 + C_1 Y$  ;  $C_1 = MPC$   
 MPC = proportion of income that we use to consume  
 also called amount of consumption depended on income

2. Assume a CLOSED economy with NO government. Let the autonomous consumption be 200 and MPS be 0.3. Draw and write equations for both saving and consumption functions.

C, S

From income = savings + consumption  
 So  $MPS + MPC = 1 \rightarrow 0.3 + MPC = 1 \rightarrow MPC = 0.7$

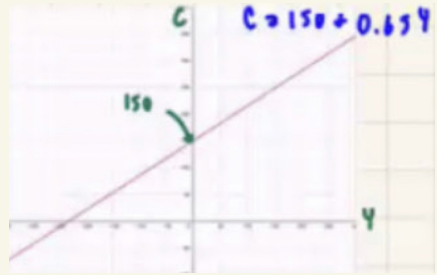
Consumption	Saving
$C = C_0 + C_1 Y$	$Y = S + C \rightarrow S = Y - C$
$C = 200 + C_1 Y$	$S = Y - (200 + 0.7Y)$
$C = 200 + 0.7Y$	$S = -200 + 0.3Y$



3. Let the saving function be  $S = -150 + 0.35Y$ . Find and draw the consumption function.

Saving function formula  
 $S = Y - C_0 + C_1 Y$   
 $S = -C_0 + (Y - C_1 Y)$   
 $S = -C_0 + (1 - C_1) Y$   
 $S = -150 + 0.35Y$

$S_0 - C_0 = -150$  &  $1 - C_1 = 0.35$   
 $C_0 = 150$        $C_1 = 0.65$   
 then  $C = C_0 + C_1 Y$   
 $C = 150 + 0.65Y$

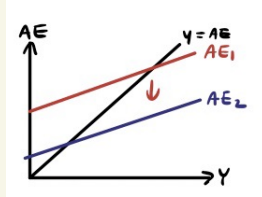


4. How do the followings affect the AE graph (i.e. explain how the graph changes) and the equilibrium output?

- All firm managers decide to buy fewer machines.
- The government decides to build more roads.
- The citizens decide to save more at all income levels.
- The citizens decide to save larger proportion of income.
- The government decides to raise tax.

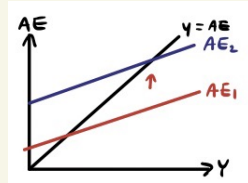
- fewer machines

$$I \downarrow \quad AE \downarrow$$



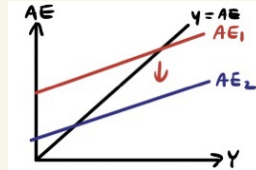
- government build more roads

$$Y \uparrow \quad AE \uparrow$$



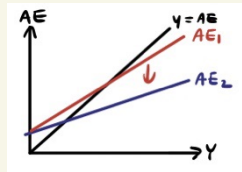
- citizens save all income levels

$$C = A + by \quad AE \downarrow$$



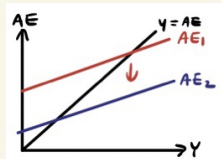
- citizens save proportion of income

$$C = A + by \quad AE \downarrow \text{ slope}$$

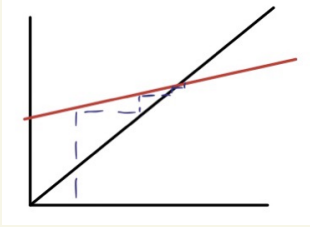


- government raise tax

$$T \uparrow \quad C \downarrow \quad AE \downarrow$$



5. In the Keynesian Cross Model, suppose that aggregate output is greater than aggregate expenditure. Explain the adjustment process towards the equilibrium.



when aggregate output higher than aggregate expenditure, it means firm produce more than people want so firm have to cut their produce

6. Let  $C = 60 + 0.6Y$  and  $I = 20$ . Find the equilibrium output with the saving/investment approach.

$$S = I ; \text{leakage} = \text{injection}$$

$$S = Y - C$$

$$= Y - (60 + 0.6Y)$$

$$= 0.4Y - 60$$

$$S = I$$

$$0.4Y - 60 = 20$$

$$0.4Y = 80$$

$$Y^* = 200$$

7. Let  $S = -60 + 0.4Y$  and  $I = 20$ . Find the equilibrium output with the standard approach.  
Now, suppose  $I$  increases by 20. Find the new equilibrium and the investment multiplier.

$$Y = AE = C + I$$

$$C = Y - S$$

$$C = Y + 60 - 0.4Y$$

$$C = 0.6Y + 60$$

$$I \uparrow 20 ; Y = 0.6Y + 60 + 40$$

$$0.4Y = 100$$

$$Y^* = 250$$

$$\text{change in } Y = 50$$

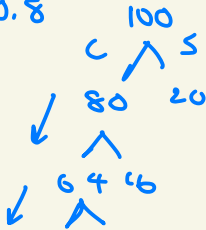
$$\text{change in } I = 20$$

$$\frac{\Delta Y}{\Delta I} = \frac{50}{20} = 2.5$$

8. With the multiplier effect, an injection of money (for example, investment) can lead to a greater proportional increase in output. Explain how this can happen.

$I \uparrow, AE \uparrow, Y \uparrow$

$MPC = 0.8$



$I = MPC + MPS$

Trickle down effect

the one pass on one person to another

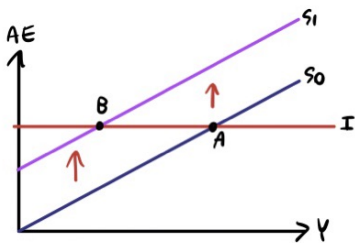
9. How is the investment multiplier related to MPC? Explain the intuition behind such relationship. (Hint: Question 9)

Investment  $M = \frac{1}{1 - MPC}$

$MPC = 0.5; M = \frac{1}{1 - 0.5} = 2$

$MPC = 0.8; M = \frac{1}{1 - 0.8} = 5$

10. What is the Paradox of Thrift? Explain it with diagram.



$ST \rightarrow AE \downarrow \rightarrow Y \downarrow \rightarrow S \downarrow$