
Instructions

Pitthawat 640123456

- (1) Please read the instruction carefully.
- (2) Please read each question carefully and answer the questions straightforwardly. Always provide economic reasons at least a paragraph for your analysis, or a graph when necessary, even when the question does not indicate so.
- (3) Handing and submitting assignments are only available via BE Moodle.

Answering the questions and preparing answer sheets

- (1) Answers are to be handwritten, in either digital or analog form, in a blank canvas or any clean paper. Make sure that your handwriting is clearly visible and readable.
- (2) There is no need to rewrite the question. Just indicate the question number clearly for each of the answer, such as 1.a).
- (3) Default decimal point is 4.
- (4) Choose precise wordings, especially when you want to interpret the meaning of a test, confidence interval, or coefficients.
- (5) When done, for the digital case, collage all the pages into a single PDF file. For those who write on sheets of paper, take photo of all pages then convert all of them into a single PDF file as well.
- (6) Name your PDF file as StudentID_YourNickname, such as 640123456_Bo.

Submitting your answers

- (1) Make sure your file does not exceed 10MB. This is the maximum file size for BE Moodle upload.
- (2) Login to BE Moodle, head into the course, then the assignment topic.
- (3) Choose your file to submit. Done. There will be timestamp for your upload date and time, so please make sure to not submit later than that.

Question 1. (12 points) Economic model of Crime.

1.a) Based on the regression results provided, write out the estimated coefficients in the form of regression equation (1.1). Interpret the estimated coefficients associated with *avgsen*. Based on Model (1.1), test whether the average sentence served from prior convictions has an impact on the number of arrests in the current year (1986). Show your work. (Use $\alpha = 0.05$)

1.b) What is the overall significance of the regression from Model (1.1) and Model (1.2)? What test do you use? (Use $\alpha = 0.01$)

1.c) If we are interested in testing whether “ethnic background and legal income” has an impact on the number of arrests in the current year (1986), what kind of null/alternative hypothesis would we be testing? Perform the test and discuss your finding. (Use $\alpha = 0.05$)

Estimate the model (1.1) reports in the Table 1.1

$$narr86_i = \beta_1 + \beta_2 pcnv_i + \beta_3 avgsen_i + \beta_4 tottime_i + \beta_5 ptime86_i + \beta_6 qemp86_i + u_i \quad (1.1)$$

Table 1.1

Source	SS	df	MS	Number of obs	=	2,725
Model	85.9532425	5	17.1906485	F(5, 2719)	=	24.29
Residual	1924.39391	2,719	.707757967	Prob > F	=	0.0000
Total	2010.34716	2,724	.738012906	R-squared	=	0.0428
				Adj R-squared	=	0.0410
				Root MSE	=	.84128

narr86	Coefficient	Std. err.	t	P> t	[95% conf. interval]
pcnv	-.1512246	.040855			Omitted for the purpose of this exam
avgsen	-.0070487	.0124122			
tottime	.0120953	.0095768			
ptime86	-.0392585	.0089166			
qemp86	-.1030909	.0103972			
_cons	.7060607	.0331524			

10.)

$$\widehat{\text{narrest}_i} = 0.71 - 0.15 \text{pcnv}_i - 0.007 \text{avgsen}_i + 0.01 \text{tottime}_i - 0.04 \text{ptimest}_i - 0.19 \text{empst}_i$$

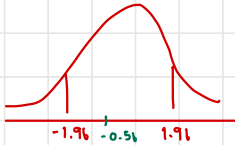
A month of prior average sentenced for prior conviction increase is corresponding the decrease of number of arrests in 1986 by 0.007 case

$$H_0 : \beta_3 = 0$$

$$H_1 : \beta_3 \neq 0$$

$$t\text{-cal} = \frac{-0.0070487 - 0}{0.0124722}$$

$$= -0.5679$$



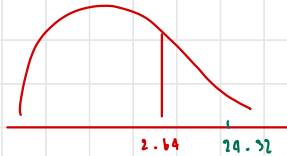
\therefore t-cal falls into rejection area. The average sentence served from prior convictions is not significant impact to the number of arrests in the current year (1986) at $\alpha = 0.05$

1b.)

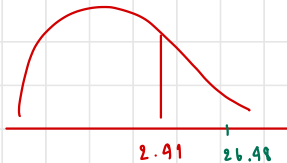
H_0 : all β_k are 0 simultaneously

H_1 : Otherwise

$$\bullet \text{ Model 1.1 : } F\text{-cal} = \frac{R^2/k-1}{(1-R^2)/n-k} = \frac{0.0428/5}{(1-0.0428)/2779} = 24.9153$$



$$\bullet \text{ Model 1.2 : } F\text{-cal} = \frac{R^2/k-1}{(1-R^2)/n-k} = \frac{0.0725/8}{(1-0.0725)/(2725-9)} = 24.4588$$



\therefore for both model $F_{\text{cal}} > F_{\text{crit}}$. We can reject null hypothesis.

Assignment 1

Assigned on Apr 9th, 2022. Due date Saturday, May 7th, 2022 before midnight.**Estimate the model (1.2) reports in the Table 1.2**

$$narr86_i = \beta_1 + \beta_2 pcv_i + \beta_3 avgsen_i + \beta_4 tottime_i + \beta_5 ptime86_i + \beta_6 qemp86_i + \beta_4 inc86_i + \beta_5 black_i + \beta_6 hispan_i + u_i \quad (1.2)$$

where

- narr86_i* = the number of arrests in the current year (1986)
pcv_i = the proportion of prior arrests that led to a conviction
avgsen_i = the average sentence served from prior convictions (in months)
tottime_i = months spent in prison since age 18 prior to 1986
ptime86_i = months spent in prison in 1986
qemp86_i = the number of quarters that the man was legally employed in 1986
inc86_i = legal income, 1986, (hundred dollars)
black_i = 1 if black ethnic background
hispan_i = 1 if Hispanic ethnic background

Table 1.2

Source	SS	df	MS	Number of obs	=	2,725
Model	145.390104	8	18.173763	F(8, 2716)	=	26.47
Residual	1864.95705	2,716	.686655763	Prob > F	=	0.0000
				R-squared	=	0.0723
				Adj R-squared	=	0.0696
Total	2010.34716	2,724	.738012906	Root MSE	=	.82865

narr86	Coefficient	Std. err.	t	P> t	[95% conf. interval]
pcnv	-.1332344	.0403502			Omitted for the purpose of this exam
avgsen	-.0113177	.0122401			
tottime	.0120224	.0094352			
ptime86	-.0408417	.008812			
qemp86	-.0505398	.0144397			
inc86	-.0014887	.0003406			
black	.3265035	.0454156			
hispan	.1939144	.0397113			
_cons	.5686855	.0360461			

1C.7 Individual test

$$H_0 : \beta_7 = 0 \quad t\text{-cal} = \frac{-0.0016867 - 0}{0.0007406} = -4.5708$$

$$H_1 : \beta_7 \neq 0$$

$$H_0 : \beta_8 = 0 \quad t\text{-cal} = \frac{0.3265035 - 0}{0.0454156} = 7.1892$$

$$H_1 : \beta_8 \neq 0$$

$$H_0 : \beta_9 = 0 \quad t\text{-cal} = \frac{0.1939144 - 0}{0.0297115} = 4.8431$$

$$H_1 : \beta_9 \neq 0$$

$$t\text{-critical} = \pm 1.96$$

\therefore $t\text{-cal}$ fall into rejection area, legal income (1986), black ethnic background, and Hispanic ethnic background have significant impact on the number of arrests in 1986

Question 2. (12 points) Dummy variables and interaction terms.

Using the Thailand labor force survey (LFS) in quarter 2 of 2019 and 2020, employees log of wage is modeled as follows. (Number of observations is 97,878 in total)

$$\ln wage_i = \beta_1 + \beta_2 civil_i + \beta_3 year_i + \beta_4 civil_i \cdot year_i + u_i$$

where

$\ln wage_i$	= natural logarithmic scale of monthly wage
$civil_i$	= 1; civil servant and state employee = 0; otherwise
$year_i$	= 1; year 2020 = 0; otherwise (2019)

This model is also known as Difference-in-Differences (DiD) and its intention is to capture the effect of COVID-19 since March of 2020 on different types of employment. During the pandemic, we assume that civil servant and state employee's wage is not reduced (control group) while others', namely employees in private firms or freelance, etc., is suspected to be reduced (treatment group). The estimation result is shown below with standard errors in parentheses. Answer the following questions.

$$\ln \widehat{wage}_i = 9.1748 + 0.587 civil_i - 0.0336 year_i + 0.0444 civil_i \cdot year_i + u_i$$

(0.0035)	(0.0072)	(0.005)	(0.0102)
----------	----------	---------	----------

- 2.a)** Test all the parameters individually if each of them is significantly different from zero or not.
- 2.b)** How much on average does a civil servant and state employee earn more or less than the others disregarding the year?
- 2.c)** How much on average does the pandemic affect wage overall?
- 2.d)** Are the control group and the treatment group better-off or worse-off during the pandemic. Discuss each group separately, show your work and explain with economic reasons according to the intention of this model.

2a.) Individual test

$$H_0: \beta_1 = 0 \quad t\text{-cal} = \frac{9.1748 - 0}{0.0075} = 2621.7114$$

$$H_1: \beta_1 \neq 0$$

$$H_0: \beta_2 = 0 \quad t\text{-cal} = \frac{0.587 - 0}{0.0072} = 81.5278$$

$$H_1: \beta_2 \neq 0$$

$$H_0: \beta_3 = 0 \quad t\text{-cal} = \frac{-0.0376 - 0}{0.005} = -6.72$$

$$H_1: \beta_3 \neq 0$$

$$H_0: \beta_4 = 0 \quad t\text{-cal} = \frac{0.0444 - 0}{0.0102} = 4.3529$$

$$H_1: \beta_4 \neq 0$$

$$t\text{-critical} = \pm 1.96$$

\therefore All parameters, $t\text{-cal}$ fall in rejection area. And they are significantly different from 0 at 0.05

2b.) 2020

$$\ln \hat{\text{wage}} = 9.1748 + 0.587 - 0.0376 + 0.0444$$
$$= 9.7726$$

$$\hat{\text{wage}} = e^{9.7726}$$

$$= 17,541.2784 \text{ baht}$$

2019

$$\ln \hat{\text{wage}} = 9.1748 + 0.587 - 0.0376(0) + 0.0444(1)(0)$$
$$= 9.7618$$

$$= 17,557.8477 \text{ baht}$$

\therefore the avg. wage of civil servant and state employer in 2020 is higher than 2019 by 188.4802 baht

2c.) not civil servant & state employee in 2020

$$\ln \hat{wage} = 9.1746 - 0.0056$$

$$= 9.1412$$

$$\hat{wage} = 9,331.9565 \text{ baht}$$

not civil servant and state employee in 2019

$$\ln \hat{wage} = 9.1748$$

$$\hat{wage} = 9,150.8377 \text{ baht}$$

∴ the avg. wage fell by 318.8809 baht

2d.) Pandemic affects normal citizens who are not civil servant and state employee from the average wage in 2020 is lower than 2019 by 318.8809 baht.

Question 3. (8 points) Multicollinearity.

As cheese ages, several chemical processes take place that determine the taste of the final product. The data given pertain to concentrations of various chemicals in a sample of 30 mature cheddar cheeses and subjective measure of taste for each sample.

Estimate the model (3.1) reports in the Table 3.1

$$Taste = \beta_0 + \beta_1 acetic + \beta_2 h2s + \beta_3 lactic + u \tag{3.1}$$

- Where *Taste* = Measures of taste for each sample
- acetic* = The natural logarithm of concentration of acetic
- h2s* = The natural logarithm of concentration of hydrogen sulfide
- lactic* = Lactic

Table 3.1

Source	SS	df	MS	Number of obs	=	30
Model	5020.64468	3	1673.54823	F(3, 26)	=	16.47
Residual	2642.24237	26	101.624706	Prob > F	=	0.0000
				R-squared	=	0.6552
				Adj R-squared	=	0.6154
Total	7662.88705	29	264.237485	Root MSE	=	10.081

taste	Coefficient	Std. err.	t	P> t	[95% conf. interval]
acetic	1.538645	3.000501			Omitted for the purpose of this exam
h2s	3.915242	1.153106			
lactic	18.80235	8.342614			
_cons	-34.13491	15.67628			

	acetic	h2s	lactic	Variable	VIF	1/VIF
acetic	1.0000			lactic	1.83	0.546648
h2s	0.2700	1.0000		h2s	1.72	0.582609
lactic	0.3607	0.6448	1.0000	acetic	1.15	0.867477
				Mean VIF	1.57	

$$3a.) H_0: \beta_k = 0 \quad \text{where } k: 2, 3, 4$$

$$H_1: \beta_k \neq 0$$

$$t\text{-cal}(\beta_2) = \frac{1.5386 - 0}{2.0005} = 0.5128$$

$$t\text{-cal}(\beta_3) = \frac{3.9152 - 0}{1.1571} = 3.3959$$

$$t\text{-cal}(\beta_4) = \frac{16.8024 - 0}{8.3426} = 2.2538$$

$$t\text{-critical} = \pm 2.056$$

$\therefore \beta_3, \beta_4$ can reject null hypothesis. However β_2 is not significant

3b.) BLUE refers to Best, Linear, Unbiased, Estimator meaning that the estimator have the lowest variance possible. They are unbiased or when there are more samples, probability limit of estimators tend towards true parameters. BLUE is not affected by multicollinearity. But multicollinearity cause misleading conclusion of hypothesis testing.

3.a) Is there evidence of multicollinearity in the data? How do you know? Explain your answers in detail and state the critical value for hypothesis testing to receive full points.

3.b) What is the property of BLUE? If there is the multicollinearity problem, is the OLS estimators still retain the property of BLUE? If not, which properties are violated?

Question 4. (8 points) Heteroscedasticity.

The data on U.S. inflation rates (%) and unemployment rates (%), 1948-2006

Estimate the model (4.1) reports in the Table 4.1

$$Inf_t = \beta_1 + \beta_2 unem_t + u_t \tag{4.1}$$

where Inf_t = inflation rates (%)

$unem_t$ = unemployment rates (%)

Table 4.1

Source	SS	df	MS	Number of obs	=	59
Model	32.3284496	1	32.3284496	F(1, 57)	=	3.85
Residual	478.096987	57	8.38766644	Prob > F	=	0.0545
Total	510.425437	58	8.80043856	R-squared	=	0.0633
				Adj R-squared	=	0.0469
				Root MSE	=	2.8961

inf	Coefficient	Std. err.	t	P> t	[95% conf. interval]
unem	.5054734	.2574699			
_cons	1.010847	1.491583			

White's general test statistic: 1.0266 Chi-sq (2)

Breusch-Pagan / Cook-Weisberg test for heteroskedasticity

chi2(1) = 1.12

Answer the following questions.

4.a) Interpret the intercept and slope coefficients.

4.b) According to the test statistics given after Table 4.1 below, is there any sufficient evidence to conclude that there is heteroscedasticity problem? Show your work on the hypothesis testing. (Use $\alpha = 0.05$)

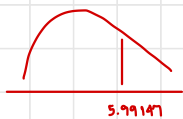
4.c) Given your test results in a), do the OLS estimators still retain the property of BLUE? If not, which properties are violated?

- 4a.)
- β_1 when unemployment equal to 0%, the inflation equal to 1.010847-1.
 - β_2 when " increase 1%, inflation rates will increase 0.5054734%.

- 4b.) H_0 : homoscedastic
 H_1 : Heteroscedasticity

• white test

$$\hat{u} = \alpha_1 + \alpha_2 \text{unem} + \alpha_3 \text{unem}^2$$



$$LM = n \cdot R^2 = 1.0266$$

$$LM_{\text{cal}} < \chi^2$$

\therefore fail to reject H_0 , it is homoscedasticity

• Breusch - Pagan

$$LM = n \cdot R^2_{k-1} = 1.12$$

4c.) Since we reject null hypothesis in 4b.) we can make sure that BLUE is not violate